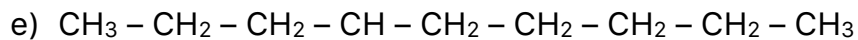
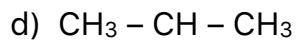
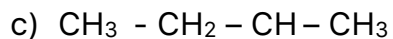
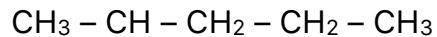
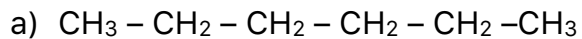


Alkanes Worksheet

Name _____

1. Write the IUPAC name for each of the following compounds:



2. Write the structural formula for each of the following compounds:

a) 2 – methylnonane

b) 4-ethyloctane

c) Butane

d) 3-methylhexane

e) 4-propyldecane